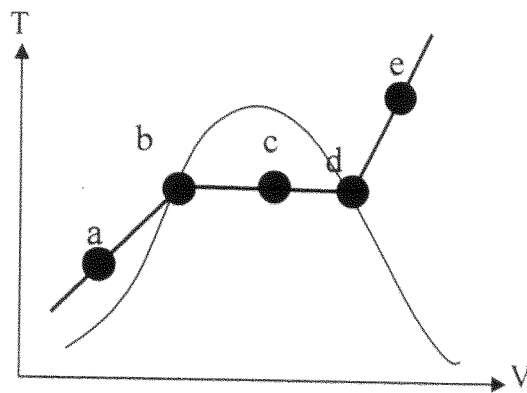


98 學年度工程與系統科學系乙組碩士班入學考試

科目熱力學 科目代碼 2702 共 6 頁第 1 頁 \*請在【答案卷卡】內作答

1. (a) Give at least three reasons which causes the Irreversible processes (3%)
- (b) At reversible process, write the entropy change  $dS$  in terms of  $(\delta Q, T)$  (2%)
- (c) If kinetic energy and potential energy can be neglected in a typical process, which thermal property would be keep at constant for the throttling process (2%)
- (d) Write down the Clausius Statement (2%) and Keylvin-Planck Statement (2%)
- (e) Write down the equation of the Clausius inequality (2%)
- (f) Write down the Thermal Efficiency of the engine,  $\eta_{th}$ , in terms of  $(Q_c, Q_H)$ , where  $Q_c$  is the heat dissipate from low temperature reservoir,  $Q_H$  is the heat input to the high temperature reservoir(2%)
- (g) Given the following picture and given the following names: saturated vapor, saturated liquid, subcooled liquid, superheated vapor, and (saturated vapor + saturated liquid). Please point out which is which for a, b, c, d, e. (5%)



2. Please answer the following question:

- (a) The differential of pressure obtained from a certain equation of state is given as the following. Write down the equation of state for the gas. (10%)

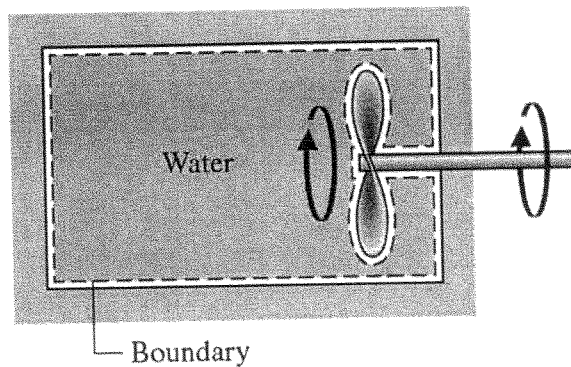
$$dp = \left( \frac{R}{V-b} - \frac{a}{V^3} \right) dT + \left[ \frac{-RT}{(V-b)^2} + \frac{3aT}{V^4} \right] dV$$

- (b) Please derive the internal energy change  $du$  as the function of the partial differential equation  $dT$  and  $dV$  with coefficient  $C_v, P, T$  and  $V$  (5%). Where  $C_v$  is the heat capacity of the gas at constant volume
- (c) According to the state of equation from problem (a), please prove internal energy change  $du$  is temperature function only. (5%)

98 學年度工程與系統科學系乙組碩士班入學考試

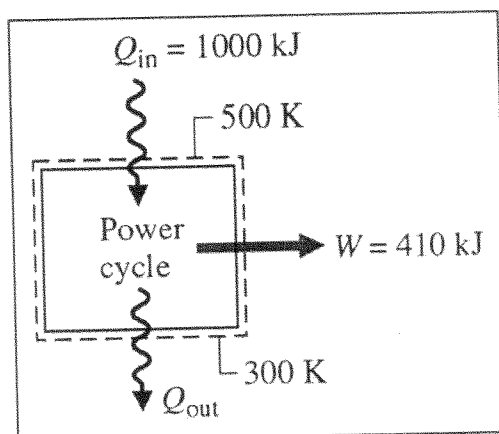
科目熱力學 科目代碼 2702 共 6 頁第 2 頁 \*請在【答案卷卡】內作答

3. A well-insulated rigid tank having a volume of  $0.283 \text{ m}^3$  contains saturated water vapor at  $99.63^\circ\text{C}$ . The water is rapidly stirred until the pressure is 1.5 bar.
- Sketch the T-V diagram from state 1 (initial state) to state 2 (final state)(4%), and mark down the temperature and pressure at each state (6%)
  - Determine the water mass in the tank in Kg (5%)
  - The work of the propeller during the process, in KJ (5%).



4. Explain

- What is the closed system (2%)
- What is the isolated system (2%)
- What is the isothermal process (2%)
- What is isochoric process (2%)
- What is the adiabatic process (2%)
- Intensive properties and give two examples (4%)
- Extensive properties and give two examples (4%)
- A power cycle operating shown as the following figure, calculate the thermal efficiency if it is Carnot Cycle (2%)

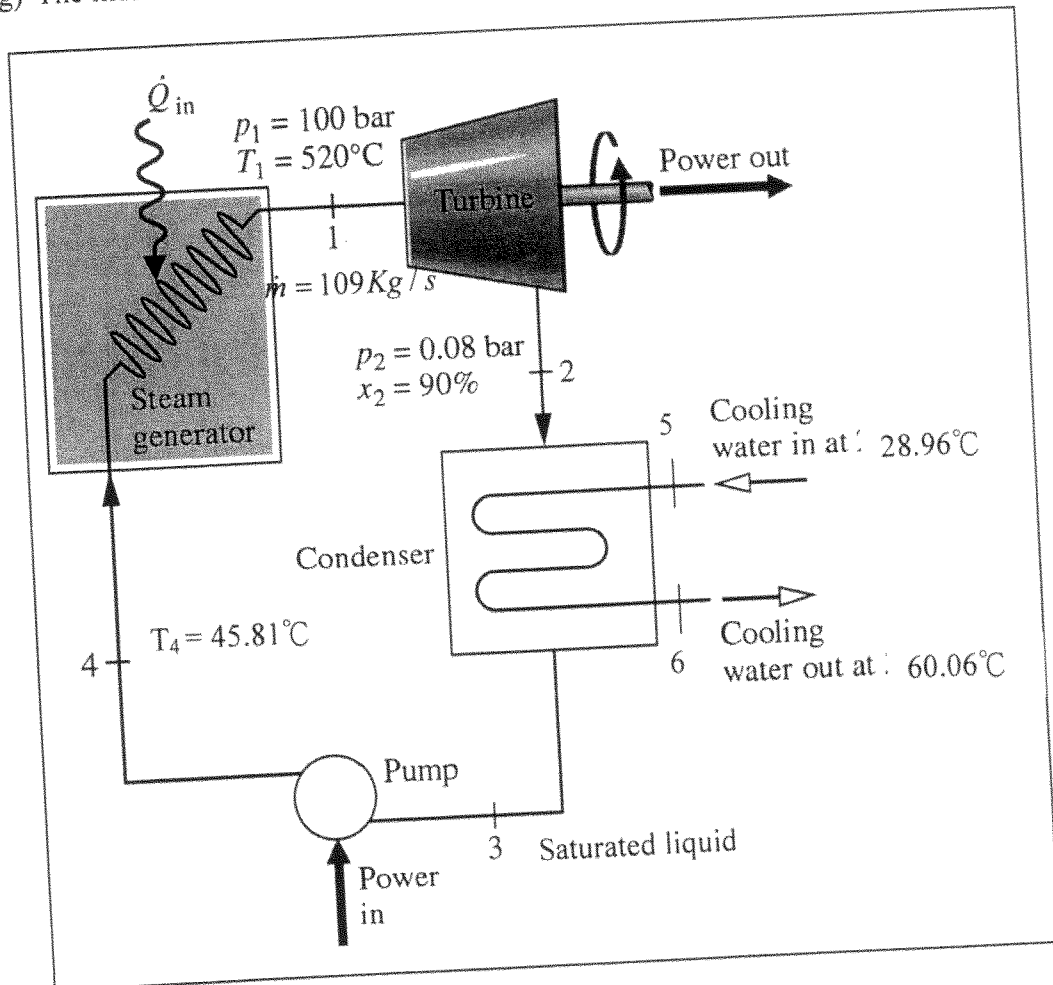


98 學年度工程與系統科學系乙組碩士班入學考試

科目熱力學 科目代碼 2702 共 6 頁第 3 頁 \*請在【答案卷卡】內作答

5. Following figure shows a simple vapor power plant operating at steady state with water circulating through the component. The mass flow rate of the water is  $109 \text{ Kg/s}$ . kinetic and potential energy effect are negligible. The turbine and pump are well insulated. Assume there is no pressure drop on steam generator and condenser, Determine

- The pressure  $P_4$  (1%) and  $P_3$  (1%) in bar
- The temperature in state 2  $T_2$  in  $^{\circ}\text{C}$  (2%)
- Evaluate enthalpy  $h_4$  (1%),  $h_2$  (2%) and  $h_3$  (1%) in (KJ/Kg)
- Evaluate  $Q_{in}$  in (KJ/s) (2%), turbine work in KJ/s (2%) and pump work in KJ/s (2%)
- The thermal efficiency of the power plant (2%)
- If this plant is operated when operates between the same two thermal reservoirs, then what is the maximum thermal efficiency of the cycle? (2%)
- The mass flow rate of the cooling water passing through the condenser, in Kg/s (2%)



98 學年度工程與系統科學系乙組碩士班入學考試

科目熱力學 科目代碼 2702 共 6 頁第 4 頁 \*請在【答案卷卡】內作答

762 Tables in SI Units

TABLE A-3 Properties of Saturated Water (Liquid-Vapor): Pressure Table

Press. bar	Temp. °C	Specific Volume m <sup>3</sup> /kg		Internal Energy kJ/kg		Enthalpy kJ/kg			Entropy kJ/kg·K		Press. bar
		Sat. Liquid $v_f \times 10^3$	Sat. Vapor $v_g$	Sat. Liquid $u_f$	Sat. Vapor $u_g$	Sat. Liquid $h_f$	Evap. $h_{fg}$	Sat. Vapor $h_g$	Sat. Liquid $s_f$	Sat. Vapor $s_g$	
0.04	28.96	1.0040	34.800	121.45	2415.2	121.46	2432.9	2554.4	0.4226	8.4746	0.04
0.06	36.16	1.0064	23.739	151.53	2425.0	151.53	2415.9	2567.4	0.5210	8.3304	0.06
0.08	41.51	1.0084	18.103	173.87	2432.2	173.88	2403.1	2577.0	0.5926	8.2287	0.08
0.10	45.81	1.0102	14.674	191.82	2437.9	191.83	2392.8	2584.7	0.6493	8.1502	0.10
0.20	60.06	1.0172	7.649	251.38	2456.7	251.40	2358.3	2609.7	0.8320	7.9085	0.20
0.30	69.10	1.0223	5.229	289.20	2468.4	289.23	2336.1	2625.3	0.9439	7.7686	0.30
0.40	75.87	1.0265	3.993	317.53	2477.0	317.58	2319.2	2636.8	1.0259	7.6700	0.40
0.50	81.33	1.0300	3.240	340.44	2483.9	340.49	2305.4	2645.9	1.0910	7.5939	0.50
0.60	85.94	1.0331	2.732	359.79	2489.6	359.86	2293.6	2653.5	1.1453	7.5320	0.60
0.70	89.95	1.0360	2.365	376.63	2494.5	376.70	2283.3	2660.0	1.1919	7.4797	0.70
0.80	93.50	1.0380	2.087	391.58	2498.8	391.66	2274.1	2665.8	1.2329	7.4346	0.80
0.90	96.71	1.0410	1.869	405.06	2502.6	405.15	2265.7	2670.9	1.2695	7.3949	0.90
1.00	99.63	1.0432	1.694	417.36	2506.1	417.46	2258.0	2675.5	1.3026	7.3594	1.00
1.50	111.4	1.0528	1.159	466.94	2519.7	467.11	2226.5	2693.6	1.4336	7.2233	1.50
2.00	120.2	1.0605	0.8857	504.49	2529.5	504.70	2201.9	2706.7	1.5301	7.1271	2.00
2.50	127.4	1.0672	0.7187	535.10	2537.2	535.37	2181.5	2716.9	1.6072	7.0527	2.50
3.00	133.6	1.0732	0.6058	561.15	2543.6	561.47	2163.8	2725.3	1.6718	6.9919	3.00
3.50	138.9	1.0786	0.5243	583.95	2546.9	584.33	2148.1	2732.4	1.7275	6.9405	3.50
4.00	143.6	1.0836	0.4625	604.31	2553.6	604.74	2133.8	2738.6	1.7766	6.8959	4.00
4.50	147.9	1.0882	0.4140	622.25	2557.6	623.25	2120.7	2743.9	1.8207	6.8565	4.50
5.00	151.9	1.0926	0.3749	639.68	2561.2	640.23	2108.5	2748.7	1.8607	6.8212	5.00
6.00	158.9	1.1006	0.3157	669.90	2567.4	670.56	2086.3	2756.8	1.9312	6.7600	6.00
7.00	165.0	1.1080	0.2729	696.44	2572.5	697.22	2066.3	2763.5	1.9922	6.7080	7.00
8.00	170.4	1.1148	0.2404	720.22	2576.8	721.11	2048.0	2769.1	2.0462	6.6628	8.00
9.00	175.4	1.1212	0.2150	741.83	2580.5	742.83	2031.1	2773.9	2.0946	6.6226	9.00
10.0	179.9	1.1273	0.1944	761.68	2583.6	762.81	2015.3	2778.1	2.1387	6.5863	10.0
15.0	198.3	1.1539	0.1318	843.16	2594.5	844.84	1947.3	2792.2	2.3150	6.4448	15.0
20.0	212.4	1.1767	0.09963	906.44	2600.3	908.79	1890.7	2799.5	2.4474	6.3409	20.0
25.0	224.0	1.1973	0.07998	959.11	2603.1	962.11	1841.0	2803.1	2.5547	6.2575	25.0
30.0	233.9	1.2165	0.06668	1004.8	2604.1	1008.4	1795.7	2804.2	2.6457	6.1869	30.0
35.0	242.6	1.2347	0.05707	1045.4	2603.7	1049.8	1753.7	2803.4	2.7253	6.1253	35.0
40.0	250.4	1.2522	0.04978	1082.3	2602.3	1087.3	1714.1	2801.4	2.7964	6.0701	40.0
45.0	257.5	1.2692	0.04406	1116.2	2600.1	1121.9	1676.4	2798.3	2.8610	6.0199	45.0
50.0	264.0	1.2859	0.03944	1147.8	2597.1	1154.2	1640.1	2794.3	2.9202	5.9734	50.0
60.0	275.6	1.3187	0.03244	1205.4	2589.7	1213.4	1571.0	2784.3	3.0267	5.8892	60.0
70.0	285.9	1.3513	0.02737	1257.6	2580.5	1267.0	1505.1	2772.1	3.1211	5.8133	70.0
80.0	295.1	1.3842	0.02352	1305.6	2569.8	1316.6	1441.3	2758.0	3.2068	5.7432	80.0
90.0	303.4	1.4178	0.02048	1350.5	2557.8	1363.3	1378.9	2742.1	3.2858	5.6772	90.0
100.	311.1	1.4524	0.01803	1393.0	2544.4	1407.6	1317.1	2724.7	3.3596	5.6141	100.
110.	318.2	1.4886	0.01599	1433.7	2529.8	1450.1	1255.5	2705.6	3.4295	5.5527	110.

98 學年度工程與系統科學系乙組碩士班入學考試

科目熱力學 科目代碼 2702 共 6 頁第 5 頁 \*請在【答案卷卡】內作答

764 Tables in SI Units

TABLE A-4 Properties of Superheated Water Vapor

$T$ °C	$v$ m <sup>3</sup> /kg	$u$ kJ/kg	$h$ kJ/kg	$s$ kJ/kg·K	$v$ m <sup>3</sup> /kg	$u$ kJ/kg	$h$ kJ/kg	$s$ kJ/kg·K
$p = 0.06 \text{ bar} = 0.006 \text{ MPa}$ ( $T_{\text{sat}} = 36.16^\circ\text{C}$ )								
Sat.	23.739	2425.0	2567.4	8.3304	4.526	2473.0	2631.4	7.7158
80	27.132	2487.3	2650.1	8.5804	4.625	2483.7	2645.6	7.7564
120	30.219	2544.7	2726.0	8.7840	5.163	2542.4	2723.1	7.9644
160	33.302	2602.7	2802.5	8.9693	5.696	2601.2	2800.6	8.1519
200	36.383	2661.4	2879.7	9.1398	6.228	2660.4	2878.4	8.3237
240	39.462	2721.0	2957.8	9.2982	6.758	2720.3	2956.8	8.4828
280	42.540	2781.5	3036.8	9.4464	7.287	2780.9	3036.0	8.6314
320	45.618	2843.0	3116.7	9.5859	7.815	2842.5	3116.1	8.7712
360	48.696	2905.5	3197.7	9.7180	8.344	2905.1	3197.1	8.9034
400	51.774	2969.0	3279.6	9.8435	8.872	2968.6	3279.2	9.0291
440	54.851	3033.5	3362.6	9.9633	9.400	3033.2	3362.2	9.1490
500	59.467	3132.3	3489.1	10.1336	10.192	3132.1	3488.8	9.3194
$p = 0.70 \text{ bar} = 0.07 \text{ MPa}$ ( $T_{\text{sat}} = 89.95^\circ\text{C}$ )								
Sat.	2.365	2494.5	2660.0	7.4797	1.694	2506.1	2675.5	7.3594
100	2.434	2509.7	2680.0	7.5341	1.696	2506.7	2676.2	7.3614
120	2.571	2539.7	2719.6	7.6375	1.793	2537.3	2716.6	7.4668
160	2.841	2599.4	2798.2	7.8279	1.984	2597.8	2796.2	7.6597
200	3.108	2659.1	2876.7	8.0012	2.172	2658.1	2875.3	7.8343
240	3.374	2719.3	2955.5	8.1611	2.359	2718.5	2954.5	7.9949
280	3.640	2780.2	3035.0	8.3162	2.546	2779.6	3034.2	8.1445
320	3.905	2842.0	3115.3	8.4504	2.732	2841.5	3114.6	8.2849
360	4.170	2904.6	3196.5	8.5828	2.917	2904.2	3195.9	8.4175
400	4.434	2968.2	3278.6	8.7086	3.103	2967.9	3278.2	8.5435
440	4.698	3032.9	3361.8	8.8286	3.288	3032.6	3361.4	8.6636
500	5.095	3131.8	3488.5	8.9991	3.565	3131.6	3488.1	8.8342
$p = 1.0 \text{ bar} = 0.10 \text{ MPa}$ ( $T_{\text{sat}} = 99.63^\circ\text{C}$ )								
Sat.	1.694	2506.1	2675.5	7.3594	1.694	2506.1	2675.5	7.3594
100	1.696	2506.7	2676.2	7.3614	1.696	2506.7	2676.2	7.3614
120	1.793	2537.3	2716.6	7.4668	1.793	2537.3	2716.6	7.4668
160	1.984	2597.8	2796.2	7.6597	1.984	2597.8	2796.2	7.6597
200	2.172	2658.1	2875.3	7.8343	2.172	2658.1	2875.3	7.8343
240	2.359	2718.5	2954.5	7.9949	2.359	2718.5	2954.5	7.9949
280	2.546	2779.6	3034.2	8.1445	2.546	2779.6	3034.2	8.1445
320	2.732	2841.5	3114.6	8.2849	2.732	2841.5	3114.6	8.2849
360	2.917	2904.2	3195.9	8.4175	2.917	2904.2	3195.9	8.4175
400	3.103	2967.9	3278.2	8.5435	3.103	2967.9	3278.2	8.5435
440	3.288	3032.6	3361.4	8.6636	3.288	3032.6	3361.4	8.6636
500	3.565	3131.6	3488.1	8.8342	3.565	3131.6	3488.1	8.8342
$p = 1.5 \text{ bar} = 0.15 \text{ MPa}$ ( $T_{\text{sat}} = 111.37^\circ\text{C}$ )								
Sat.	1.159	2519.7	2693.6	7.2233	0.606	2543.6	2725.3	6.9919
120	1.188	2533.3	2711.4	7.2693	0.606	2543.6	2725.3	6.9919
160	1.317	2595.2	2792.8	7.4665	0.651	2587.1	2782.3	7.1276
200	1.444	2656.2	2872.9	7.6433	0.716	2650.7	2865.5	7.3115
240	1.570	2717.2	2952.7	7.8052	0.781	2713.1	2947.3	7.4774
280	1.695	2778.6	3032.8	7.9555	0.844	2775.4	3028.6	7.6299
320	1.819	2840.6	3113.5	8.0964	0.907	2838.1	3110.1	7.7722
360	1.943	2903.5	3195.0	8.2293	0.969	2901.4	3192.2	7.9061
400	2.067	2967.3	3277.4	8.3555	1.032	2965.6	3275.0	8.0330
440	2.191	3032.1	3360.7	8.4757	1.094	3030.6	3358.7	8.1538
500	2.376	3131.2	3487.6	8.6466	1.187	3130.0	3486.0	8.3251
600	2.685	3301.7	3704.3	8.9101	1.341	3300.8	3703.2	8.5892
$p = 3.0 \text{ bar} = 0.30 \text{ MPa}$ ( $T_{\text{sat}} = 133.55^\circ\text{C}$ )								
Sat.	0.606	2543.6	2725.3	6.9919	0.606	2543.6	2725.3	6.9919
120	0.651	2587.1	2782.3	7.1276	0.651	2587.1	2782.3	7.1276
160	0.716	2650.7	2865.5	7.3115	0.716	2650.7	2865.5	7.3115
200	0.781	2713.1	2947.3	7.4774	0.781	2713.1	2947.3	7.4774
240	0.844	2775.4	3028.6	7.6299	0.844	2775.4	3028.6	7.6299
280	0.907	2838.1	3110.1	7.7722	0.907	2838.1	3110.1	7.7722
320	0.969	2901.4	3192.2	7.9061	0.969	2901.4	3192.2	7.9061
360	1.032	2965.6	3275.0	8.0330	1.032	2965.6	3275.0	8.0330
400	1.094	3030.6	3358.7	8.1538	1.094	3030.6	3358.7	8.1538
440	1.187	3130.0	3486.0	8.3251	1.187	3130.0	3486.0	8.3251
500	1.341	3300.8	3703.2	8.5892	1.341	3300.8	3703.2	8.5892

98 學年度工程與系統科學系乙組碩士班入學考試

科目熱力學 科目代碼 2702 共 6 頁第 6 頁 \*請在【答案卷卡】內作答

766 Tables in SI Units

TABLE A-4 (Continued)

H<sub>2</sub>O

$T$ °C	$v$ m <sup>3</sup> /kg	$u$ kJ/kg	$h$ kJ/kg	$s$ kJ/kg·K	$v$ m <sup>3</sup> /kg	$u$ kJ/kg	$h$ kJ/kg	$s$ kJ/kg·K
$p = 40 \text{ bar} = 4.0 \text{ MPa}$ ( $T_{\text{sat}} = 250.4^\circ\text{C}$ )								
Sat.	0.04978	2602.3	2801.4	6.0701	0.03244	2589.7	2784.3	5.8892
280	0.05546	2680.0	2901.8	6.2568	0.03317	2605.2	2804.2	5.9252
320	0.06199	2767.4	3015.4	6.4553	0.03876	2720.0	2952.6	6.1846
360	0.06788	2845.7	3117.2	6.6215	0.04331	2811.2	3071.1	6.3782
400	0.07341	2919.9	3213.6	6.7690	0.04739	2892.9	3177.2	6.5408
440	0.07872	2992.2	3307.1	6.9041	0.05122	2970.0	3277.3	6.6853
500	0.08643	3099.5	3445.3	7.0901	0.05665	3082.2	3422.2	6.8803
540	0.09145	3171.1	3536.9	7.2056	0.06015	3156.1	3517.0	6.9999
600	0.09885	3279.1	3674.4	7.3688	0.06525	3266.9	3658.4	7.1677
640	0.1037	3351.8	3766.6	7.4720	0.06859	3341.0	3752.6	7.2731
700	0.1110	3462.1	3905.9	7.6198	0.07352	3453.1	3894.1	7.4234
740	0.1157	3536.6	3999.6	7.7141	0.07677	3528.3	3989.2	7.5190

$p = 80 \text{ bar} = 8.0 \text{ MPa}$ ( $T_{\text{sat}} = 295.06^\circ\text{C}$ )				
Sat.	0.02352	2569.8	2758.0	5.7432
320	0.02682	2662.7	2877.2	5.9489
360	0.03089	2772.7	3019.8	6.1819
400	0.03432	2863.8	3138.3	6.3634
440	0.03742	2946.7	3246.1	6.5190
480	0.04034	3025.7	3348.4	6.6586
520	0.04313	3102.7	3447.7	6.7871
560	0.04582	3178.7	3545.3	6.9072
600	0.04845	3254.4	3642.0	7.0206
640	0.05102	3330.1	3738.3	7.1283
700	0.05481	3443.9	3882.4	7.2812
740	0.05729	3520.4	3978.7	7.3782

$p = 100 \text{ bar} = 10.0 \text{ MPa}$ ( $T_{\text{sat}} = 311.06^\circ\text{C}$ )				
Sat.	0.01803	2544.4	2724.7	5.6141
320	0.01925	2588.8	2781.3	5.7103
360	0.02331	2729.1	2962.1	6.0060
400	0.02641	2832.4	3096.5	6.2120
440	0.02911	2922.1	3213.2	6.3805
480	0.03160	3005.4	3321.4	6.5282
520	0.03394	3085.6	3425.1	6.6622
560	0.03619	3164.1	3526.0	6.7864
600	0.03837	3241.7	3625.3	6.9029
640	0.04048	3318.9	3723.7	7.0131
700	0.04358	3434.7	3870.5	7.1687
740	0.04560	3512.1	3968.1	7.2670

$p = 120 \text{ bar} = 12.0 \text{ MPa}$ ( $T_{\text{sat}} = 324.75^\circ\text{C}$ )				
Sat.	0.01426	2513.7	2684.9	5.4924
360	0.01811	2678.4	2895.7	5.8361
400	0.02108	2798.3	3051.3	6.0747
440	0.02355	2896.1	3178.7	6.2586
480	0.02576	2984.4	3293.5	6.4154
520	0.02781	3068.0	3401.8	6.5555
560	0.02977	3149.0	3506.2	6.6840
600	0.03164	3228.7	3608.3	6.8037
640	0.03345	3307.5	3709.0	6.9164
700	0.03610	3425.2	3858.4	7.0749
740	0.03781	3503.7	3957.4	7.1746

$p = 140 \text{ bar} = 14.0 \text{ MPa}$ ( $T_{\text{sat}} = 336.75^\circ\text{C}$ )				
Sat.	0.01149	2476.8	2637.6	5.3717
360	0.01422	2617.4	2816.5	5.6602
400	0.01722	2760.9	3001.9	5.9448
440	0.01954	2868.6	3142.2	6.1474
480	0.02157	2962.5	3264.5	6.3143
520	0.02343	3049.8	3377.8	6.4610
560	0.02517	3133.6	3486.0	6.5941
600	0.02683	3215.4	3591.1	6.7172
640	0.02843	3296.0	3694.1	6.8326
700	0.03075	3415.7	3846.2	6.9939
740	0.03225	3495.2	3946.7	7.0952