

國立清華大學 103 學年度碩士班考試入學試題

系所班組別：工程與系統科學系 乙組

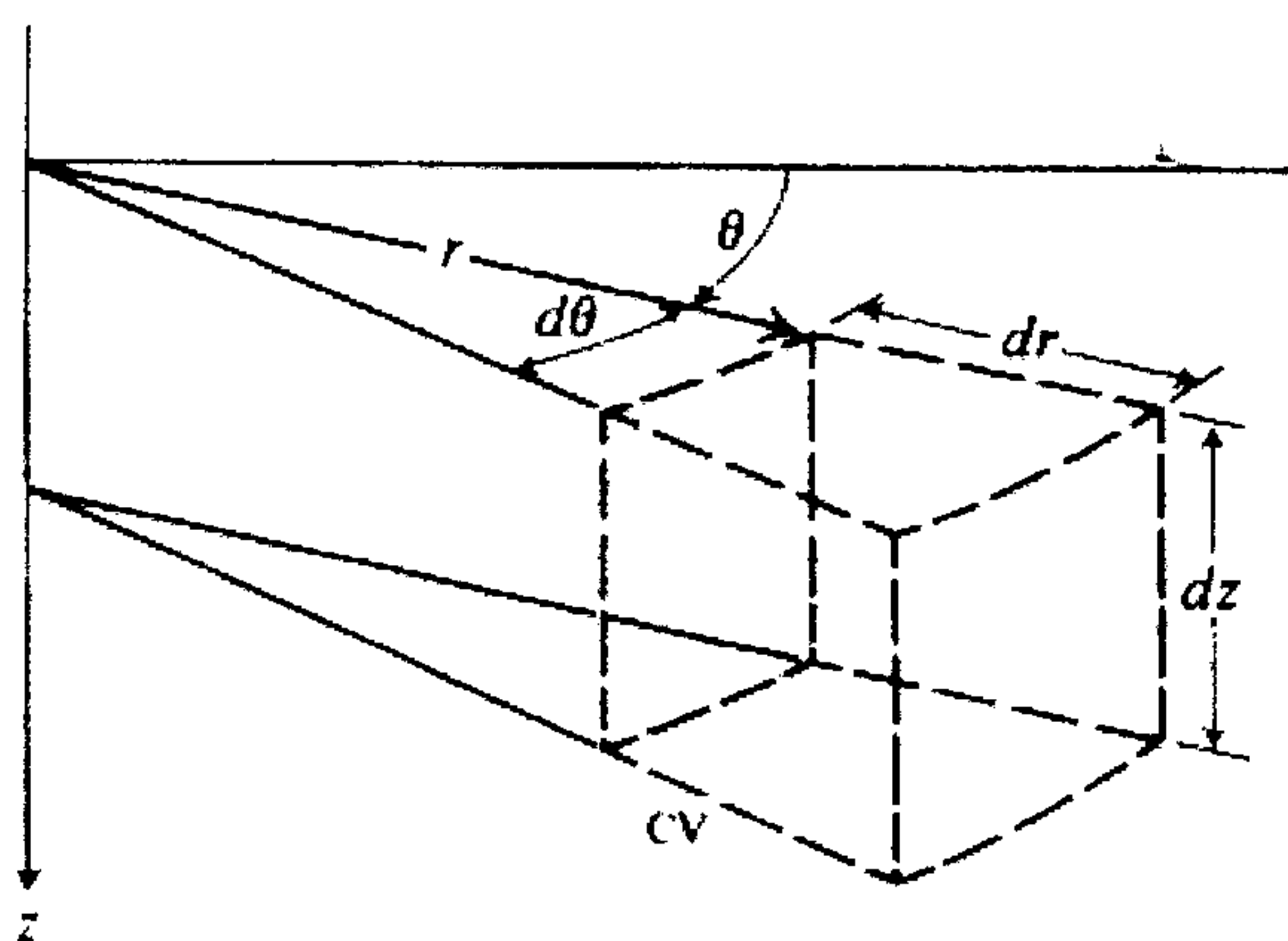
考試科目（代碼）：流體力學(2703)

1. (15%)

試畫出 Moody chart(儘量詳細)，並解釋圖上每一個參數以及 Moody chart 的用途

2. (30%)

利用控制體積法(control volume method)，試推導圓柱座標(cylindrical coordinates)型式的 Navier-Stokes equation。(σ is the normal stress and τ is the shear stress)



[Hint]

$$\sigma_{rr} = -p + 2\mu \frac{\partial v_r}{\partial r}$$

$$\sigma_{\theta\theta} = -p + 2\mu \left(\frac{1}{r} \frac{\partial v_\theta}{\partial \theta} + \frac{v_r}{r} \right)$$

$$\sigma_{zz} = -p + 2\mu \frac{\partial v_z}{\partial z}$$

$$\tau_{r\theta} = \tau_{\theta r} = \mu \left(r \frac{\partial}{\partial r} \left(\frac{v_\theta}{r} \right) + \frac{1}{r} \frac{\partial v_r}{\partial \theta} \right)$$

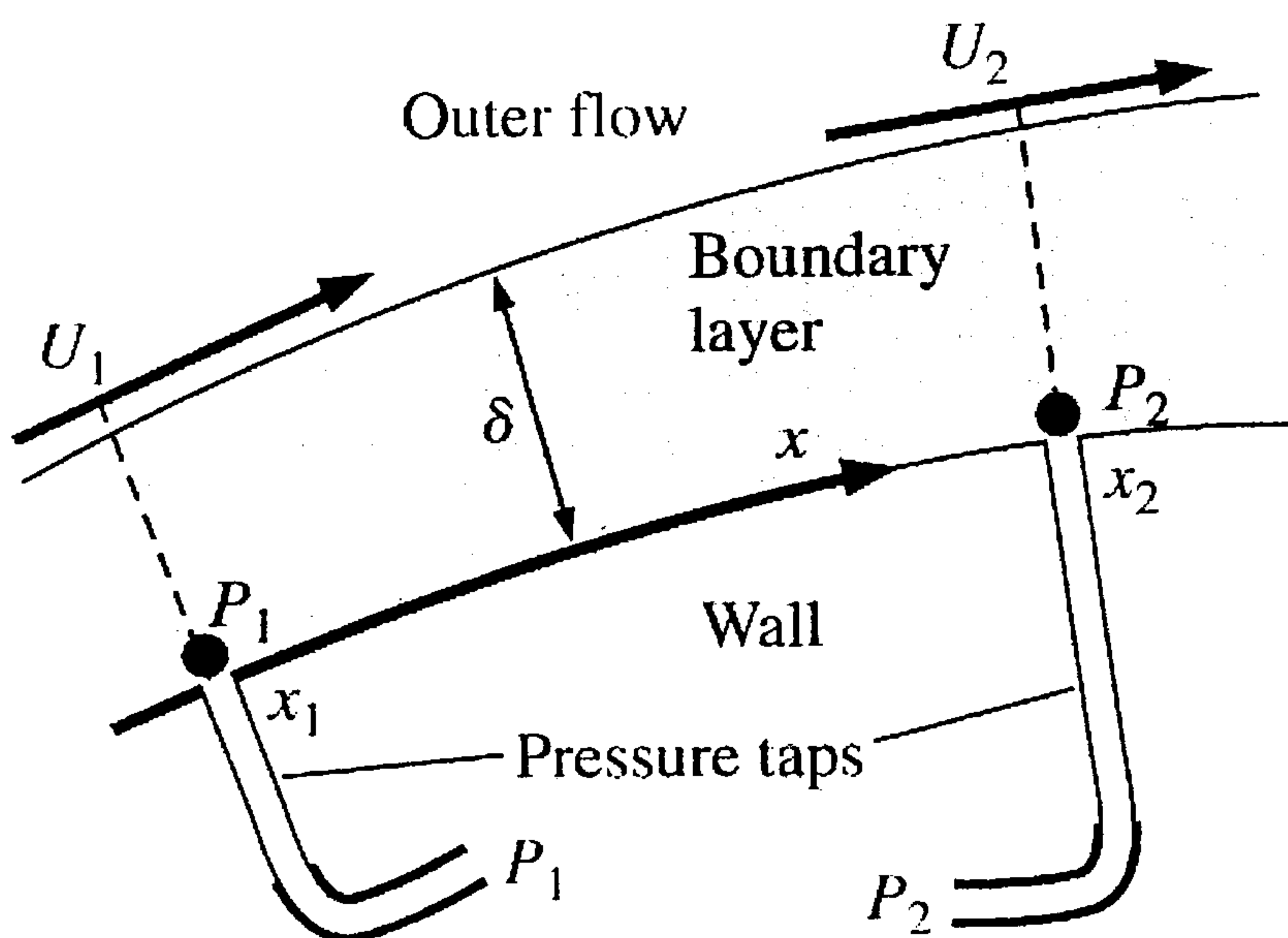
$$\tau_{\theta z} = \tau_{z\theta} = \mu \left(\frac{\partial v_\theta}{\partial z} + \frac{1}{r} \frac{\partial v_z}{\partial \theta} \right)$$

$$\tau_{rz} = \tau_{zr} = \mu \left(\frac{\partial v_r}{\partial z} + \frac{\partial v_z}{\partial r} \right)$$

3. (15%)

Static pressure P is measured at two locations along the wall of a laminar boundary layer (as shown in the following figure). The measured pressures are P_1 and P_2 , and the distance between the taps is small compared to the characteristic body dimension ($\Delta x = x_2 - x_1 \ll L$). The outer flow velocity above the boundary layer at point 1 is U_1 . The fluid density and viscosity are ρ and μ , respectively. Generate an approximate expression for U_2 , the outer flow velocity above the boundary layer at point 2, in terms of P_1 , P_2 , Δx , U_1 , ρ and μ .

Hint: You can solve this problem from the one-dimensional Euler's equation above the boundary layer

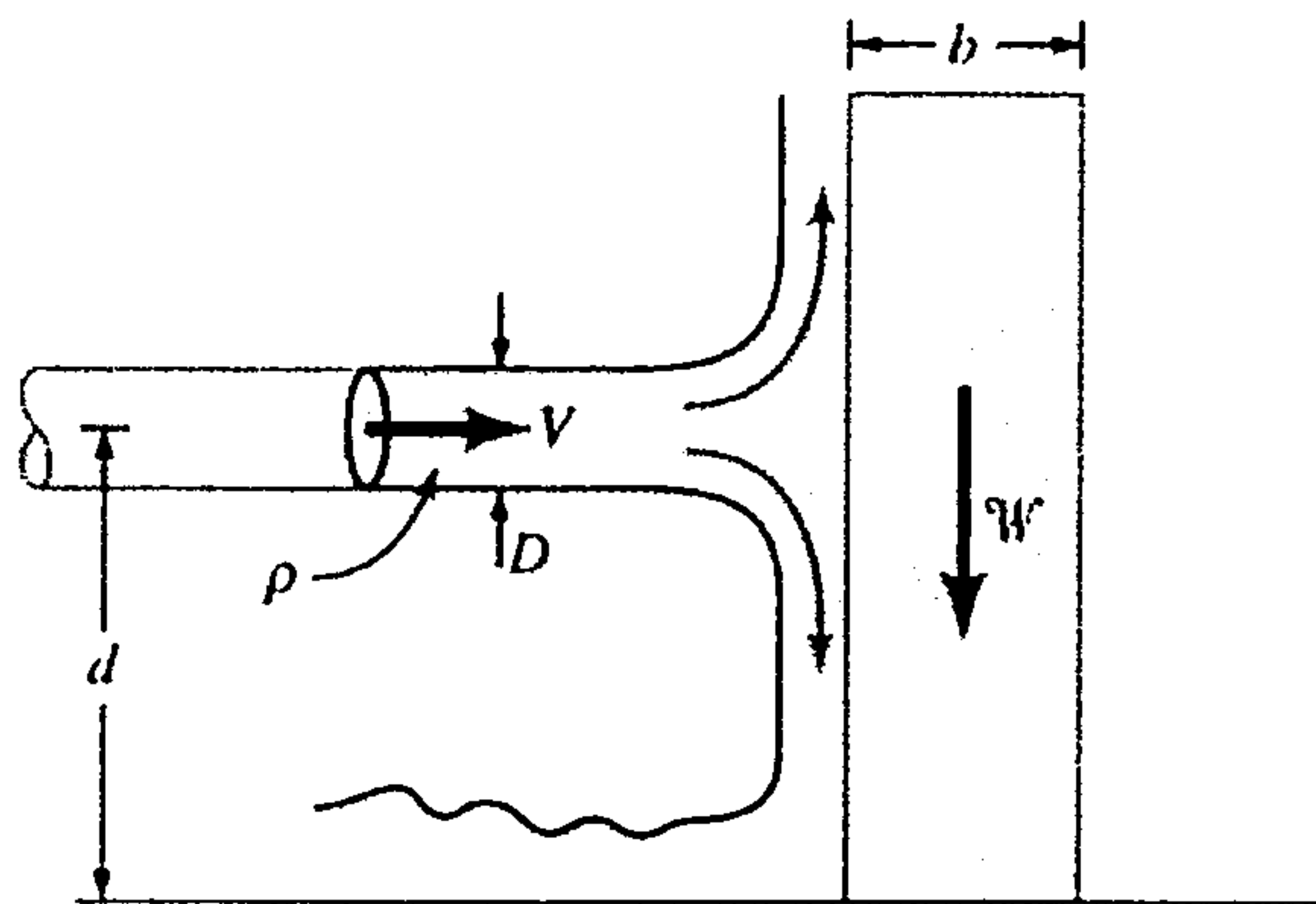


4. (20%)

As shown in the following figure, a jet of liquid directed against a block can tip over the block. Assume that the velocity, V , needed to tip over the block is a function of the fluid density, ρ , the diameter of the jet, D , the weight of the block, W , the width of the block, b , and the diameter, d , between the jet and the bottom of the block.

(a) Determine a set of dimensionless parameters for this problem.

(b) Use the momentum equation to determine an equation for V in terms of the other variables.



5. (20%)

A laminar boundary layer velocity profile is approximately by

$$\frac{u}{U} = \left[2 - \left(\frac{y}{\delta} \right) \right] \left(\frac{y}{\delta} \right) \quad \text{for } y \leq \delta, \text{ and}$$

$$\frac{u}{U} = 1 \quad \text{for } y > \delta$$

(a) Show that this profile satisfies the appropriate boundary conditions for the boundary layer;

(b) Use the momentum integral equation to determine the boundary thickness, δ